

QUIZ BANK – CLASS IV

1. I was shocked _____ see him.
 - a. by
 - b. with
 - c. to
 - d. before
2. I am not going out _____ my parents.
 - a. with
 - b. at
 - c. by
 - d. to
3. Isha saw two _____ were playing with each other.
 - a. monkeyes
 - b. monkeys
 - c. monkeyies
 - d. monkeys
4. Which pronoun can be used for the highlighted word? Tarun was standing at the bus stop. **Tarun** was waiting for the bus.
 - a. He
 - b. Them
 - c. You
 - d. They
5. Reetu will not to the school today, _____?
 - a. will she
 - b. willn't she
 - c. were she
 - d. won't she
6. Kunal has a cute pet dog. _____ is brown in colour.
 - a. He
 - b. It
 - c. I
 - d. She
7. I could not go out because of the bad _____.
 - a. wether
 - b. whether
 - c. weather
 - d. whetheer
8. Give someone the benefit of _____.
 - a. stitch
 - b. disguise
 - c. doubt
 - d. corner
9. Who is the writer of the famous book 'Harry Potter and the Philosopher's Stone'?
 - a. Charles Dickens
 - b. Roald Dahl
 - c. Jean
 - d. J.K. Rowling
10. Tick the adverb: 'He was walking carelessly on the road.'
 - a. He
 - b. walking
 - c. road
 - d. carelessly
11. My cousin is going to Kerala.
 - a. Common noun
 - b. Collective noun
 - c. Proper noun
 - d. None of the above
12. I _____ definitely going to talk to him.
 - a. am
 - b. are
 - c. is
 - d. will
13. Isha and Rimmy _____ to each other.
 - a. are talking
 - b. am talking
 - c. is talking
 - d. will talking
14. Tick the synonym of the word 'Content'.
 - a. Happy
 - b. Tired
 - c. Energetic
 - d. Sad
15. Tick the synonym of the word 'Generous'.
 - a. Disappear
 - b. Kind
 - c. Evaporate
 - d. Fade out
16. _____ wins the race.
 - a. Slow and slowly
 - b. Slow and steady
 - c. Quick and ruickly
 - d. Quick and slow

17. It is a poor workman who blames his ____.
- tools
 - fate
 - bush
 - dogs
18. When I received the first prize I was ____.
- cloud on nine
 - on cloud nine
 - on nine cloud
 - None of the above
19. The team has been _____ really hard on the project.
- works
 - working
 - work
 - worked
20. Payal _____ melodiously.
- singed
 - sings
 - sing
 - singing
21. Find the antonym of the word Insane.
- Selfish
 - Tired
 - Sane
 - Demand
22. The **king** and the _____ went on a tour. (Opposite gender of the highlighted word)
- princess
 - queen
 - count
 - emperor
23. I saw a _____ of penguins.
- hive
 - bunch
 - rookery
 - group
24. You should take the next _____ to reach your destination.
- right
 - rite
 - write
 - righte
25. Will you be going _____ meet your uncle?
- two
 - too
 - too
 - to
26. My friends are _____ there for me.
- always
 - allways
 - alwasy
 - alwayz
27. There are _____ consonants.
- 26
 - 28
 - 07
 - 21
28. There are _____ vowels.
- 05
 - 09
 - 08
 - 11
29. Ishita is a **studious** child. **Studious** is ____.
- adverb
 - adjective
 - verb
 - preposition
30. Tick the word which should be capitalised.
- ganga
 - danced
 - boy
 - pizza
31. My house is _____ than yours.
- big
 - biggest
 - bigger
 - most big
32. After a long day at work I feel tired. Extreme word for tired is _____.
- amazing
 - lazy
 - energetic
 - exhausted
33. The cat jumped _____ the cart and jumped _____ the river.
- on, in
 - over, in
 - over, into
 - on, into
34. The opposite gender of wizard is _____.
- bitch
 - ditch
 - witch
 - hitch

35. You can go out with your friends _____ you are done with your work.
- ones
 - oncc
 - once
 - onse
36. Dividend-246 Divisor- 6 Quotient- _____
- 8
 - 16
 - 10
 - 41
37. 120 books are placed equally on 5 shelves. Each shelf will have _____ books.
- 24
 - 10
 - 5
 - 0
38. $5 \times 3 = 15$, $15 \div \underline{\quad} = 5$, $15 \div 5 = \underline{\quad}$
- 3,3
 - 5,3
 - 15
 - 0
39. $128 \div 3 = \underline{\quad}$ Remainder=2
- 17
 - 18
 - 42
 - 6
40. $678 \div 1 = \underline{\quad}$
- 1
 - 0
 - 678
 - 10
41. $3+3+3+3 = \underline{\quad} \times 3$
- 3
 - 4
 - 0
 - 1
42. We can get dividend by _____ quotient with divisor and adding remainder to it.
- dividing
 - adding
 - subtracting
 - multiplying
43. The Remainder when 420 is divided by 8 is _____
- 4
 - 0
 - 1
 - 54
44. $0 * 18 = 0$,star can be replaced by
- + or -
 - + or x
 - x or \div
 - or \div
45. Estimate $756 \div 8$, the quotient is between what numbers
- 8 and 10
 - 11 and 13
 - 80 and 100
 - 110 and 130
46. Reema bought 8 packets of potato chips For $\square 24$. Which of the following number sentence could be used to determine the cost of one packet
- $24+8$
 - $24-8$
 - 24×8
 - $24 \div 8$
47. If $100 \div 2 = 50$, $200 \div 4 = 50$, $300 \div 6 = 50$ then $800 \div \underline{\quad} = 50$
- 8
 - 10
 - 12
 - 16
48. How many 5 rupee coins can make a sum of $\square 100$?
- 20
 - 10
 - 15
 - 5
49. Numeral for – Seventy lakh seven is:
- 70,007
 - 70,070
 - 70,00,007
 - 70,07,070
50. One lakh has _____ hundreds
- 1
 - 10
 - 100
 - 1000
51. Multiply the smallest number of 3 digits by the largest number of 2 digits.
- 1000
 - 9899
 - 9900

d. 1099

52. Jaya cuts an apple into eight equal parts. She eats five of them. What fraction of apple did she eat?

- a. $\frac{3}{8}$
- b. $\frac{3}{5}$
- c. $\frac{5}{8}$
- d. $\frac{8}{3}$

53. Represent the shaded part in the following figure as a fraction.



- a. $\frac{3}{7}$
- b. $\frac{7}{3}$
- c. $\frac{4}{7}$
- d. $\frac{3}{4}$

54. If the price of one puzzle is Rupees 160, find the price of 19 puzzles.

- a. Rupees 3200
- b. Rupees 1440
- c. Rupees 3040
- d. Rupees 3000

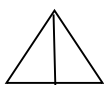
55. Mayank has five notes of two hundred rupees. He spends Rupees 470 to buy books and stationary. Find the remaining amount left with him.

- a. Rupees 1000
- b. Rupees 530
- c. Rupees 500
- d. Rupees 450

56. Which of the following would you use to show a particular location ?

- a. Ray
- b. Line
- c. Line segment
- d. Point

57. The number of triangles in the following figure is :



- a. 3
- b. 4
- c. 6
- d. 2

58. Which of the following is NOT true for a Rectangle?

- a. Sum of all the angles of a rectangle is 360 degrees.
- b. Each angle of a rectangle is a right angle.
- c. All sides of a rectangle are equal.
- d. Opposite sides of a rectangle are equal.

59. Breadth of a rectangle is 5cm less than the length. If length of the rectangle is 13cm, find the area of the rectangle.

- a. 65sq. cm.
- b. 18sq. cm
- c. 104 sq. cm
- d. 234 sq. cm

60. Perimeter of a square is 20cm. Find the side of the square.

- a. 10 cm
- b. 5 cm
- c. 4 cm
- d. 12 cm

61. $P = 45685$, $Q = 40085$, $R = 48789$. Which of the following is greatest?

- a. $P + Q$
- b. $P + R$
- c. $Q + R$
- d. All are equal

62. There are 52 students in a class. Each student plants 16 trees. How many trees were planted?

- a. 800
- b. 850
- c. 832
- d. 520

63. If $\bigcirc = 96$, $\triangle = 84$. Find the successor of $\bigcirc + \triangle$

- a. 180
- b. 179
- c. 181
- d. 196

64. Deepak subtracted 23789 from a number. The remainder was 9805. What was the number he started with?

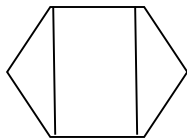
- a. 33594
- b. 33000
- c. 33600
- d. 34000

65. One bag contains 104 kg of sugar.
What will be the total quantity of sugar in 247 such bags?
- 25689
 - 25868
 - 25688
 - 25800

66. A number multiplied by 52 gives 9672.
Find the number.
- 186
 - 180
 - 182
 - 189

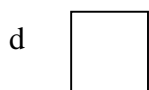
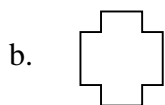
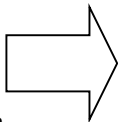
67. Arrange the following fractions in ascending order: $\frac{3}{8}$, $\frac{7}{8}$, $\frac{4}{8}$, $\frac{5}{8}$
- $\frac{3}{8}, \frac{5}{8}, \frac{4}{8}, \frac{7}{8}$
 - $\frac{7}{8}, \frac{5}{8}, \frac{4}{8}, \frac{3}{8}$
 - $\frac{3}{8}, \frac{4}{8}, \frac{5}{8}, \frac{7}{8}$
 - None of these

68. How many line segments are there in the following figure?



- 6
 - 5
 - 4
 - 8
69. In which of the following group would you place an angle of 75 degrees?
- Obtuse Angle
 - Acute Angle
 - Right Angle
 - Straight Angle

70. Raja draws a closed figure of 4 corners and 4 equal sides. Which of the following did he draw?



71. How long does it take for the moon to complete one revolution around the Earth?
- One day
 - One week
 - $29 \frac{1}{3}$ days
 - 365 days

72. The phase of the moon when the dark side faces the Earth is _____.
- A crescent moon
 - A new moon
 - A gibbous moon
 - A full moon

73. What are the colorful parts of flowers that protect the flower parts where seeds are made?
- Sepals
 - Petals
 - Stamens
 - Pistils

74. Plants use sunlight to make sugars in the process of _____.
- Oxidation
 - Photosynthesis
 - Fertilization
 - Reproduction

75. The green substance produced by plant leaves is _____.
- Chlorophyll
 - Oxygen
 - Nitrate
 - Phosphate

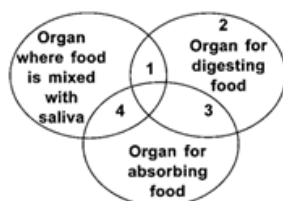
76. Meteorologists measure wind speed with a/an _____.
- Wind vane
 - Anemometer
 - Barometer
 - Thermometer

77. The flow of energy and materials through food chains that are connected form a _____.
- Food order
 - Food cycle
 - Food web
 - Food source

78. A gas that plants need to make sugar is _____.
- Nitrogen
 - Oxygen
 - Carbon dioxide
 - Nitrate

79. The tiny part of a seed that can grow into a plant is the _____.
- Pistil
 - Embryo

- c. Spore
 - d. Fruit
80. The time it takes the Earth to orbit the sun is one _____.
- a. Month
 - b. Year
 - c. Season
 - d. Day
81. Select the correct match from the following.
- a. Incisor-juice
 - b. Canine-grinder
 - c. Molar-scissor
 - d. Premolar-grinder
82. Dehydration is a method of preserving food by
- a. Adding sugar
 - b. Drying
 - c. Adding salt
 - d. Boiling
83. _____ is the organ where absorption of water from food occurs.
- a. Large intestine
 - b. Stomach
 - c. Small intestine
 - d. Rectum
84. Which of the labelled areas in the Venn diagram represents the small intestine?



- a. 1
 - b. 2
 - c. 3
 - d. 4
85. Which of the following is NOT true regarding the care of teeth?
- a. Teeth get damaged by chewing food.
 - b. We should not eat too many sweets.
 - c. We should brush our teeth twice a day.
 - d. We should eat raw fruits and vegetables
86. Ramu took a glass of milk and poured two teaspoonful of buttermilk in it at night. In the morning he obtained curd. Which of the following has helped in changing milk into curd?

- a. Protozoa
 - b. Bacteria
 - c. Virus
 - d. Fungi
87. The outer portion of the tooth above the gum is called
- a. the crown.
 - b. the root.
 - c. the enamel
 - d. the pulp
88. Which of the following stops the bleeding of nose?
- a. Sneezing
 - b. Moving head up and down
 - c. Pinching the nose
 - d. Rubbing the nose
89. The process by which a young one comes out an egg is called:
- a. Hatching
 - b. Reproduction
 - c. Moulting
 - d. Photosynthesis
90. _____ are clusters of eggs laid by frog.
- a. Nymph
 - b. Spawns
 - c. Embryo
 - d. Maggot
91. _____ is shedding of old skin by animals.
- a. Reproduction
 - b. Moulting
 - c. Life cycle
 - d. Incubation
92. Raju buried a dead rat under the soil. When he dug up one year later, he found that it had decayed and decomposed. Which of the following is responsible for the decay?
- a. Bacteria
 - b. Virus
 - c. Sand
 - d. Protozoa
93. Venus: Hottest planet: _____:
Coldest planet
- a. Jupiter
 - b. Uranus
 - c. Neptune
 - d. Mars
94. The asteroid belt is present between which two planets?
- a. Mercury and Venus
 - b. Uranus and Neptune
 - c. Jupiter and Saturn

- d. Jupiter and Mars
95. Can you tell why the moon is not a planet?
- Because the moon has no atmosphere.
 - The moon doesn't have its own light.
 - The moon isn't moving around a star
 - All of the above options
96. What are comets made up of?
- Fire
 - Colorful smoke
 - Bust and ice
 - Ribbons
97. A ring of small bodies, which are made of rock and metal, and are present between inner and outer planets, are called-
- Meteors
 - Meteorites
 - Comets
 - Asteroids
98. Shreya plucked a lotus plant from a pond near her house. She observed that it has a long hollow stem. Can you explain the function of the stem?
- To help leaves float on water
 - To absorb soil
 - To fix the plant to the bottom of the pond
 - To make the flower beautiful
99. Plants in hilly areas have to bear high speed winds and cold. Which of the following adaptations best helps them face the above conditions?
- Having lots of branches and leaves
 - Tall and straight trunk with needle like leaves
 - Leaves which are modified into spines
 - Breathing roots which come above the ground
100. In cactus plants, photosynthesis occurs in
- Leaves
 - Stem
 - Roots
 - Spines
101. If a plant is placed in a dark room it will soon
- Bear fruit
 - Bear fruit
 - Grow bigger
 - Become weak and die
102. Abhi knew that plants adapt themselves to the conditions in the environment in which they live. He observed a plant and noticed that it has lots of branches and leaves, can stand summer heat, sheds its leaves in the autumn. But he is confused to identify what kind of plant it is. Can you help him?
- It is a plant that grows in plains.
 - It is a plant of hilly areas.
 - It is a plant that lives under water.
 - It is a plant that grows in marshy areas
103. Which among the following is an egg laying mammal?
- Bat
 - Dog
 - Duck billed platypus
 - Hen
104. Which of the following stores fats in their bodies?
- Dolphin
 - Camel
 - Bat
 - Lizard
105. Which among the following is a water borne disease?
- typhoid
 - measles
 - malaria
 - dengue
106. Litti-Chokha and Sattu Parantha are popular dishes of this state.
- Bihar
 - Orissa
 - Haryana
 - Gujarat
107. India is located in the continent of ____.
- Europe
 - Asia
 - Antarctica
 - Africa
108. It is a union territory and capital of 2 states.
- Bengaluru

- b. Imphal
c. Chandigarh
d. Bhopal
109. Which of these countries is not one of our neighbors?
a. Iran
b. Pakistan
c. Sri-Lanka
d. Bhutan
110. The life of the people of this state revolves around Bamboo as it grows in abundance.
a. Nagaland
b. Sikkim
c. Manipur
d. Mizoram
111. Kathakali and _____ are the popular classical dances of Kerala.
a. Odissi
b. Manipuri
c. Bharatnatyam
d. Mohiniattam
112. It is the branch of river Ganga that flows in Bangladesh.
a. Padma
b. Saraswati
c. Mandakani
d. Hoogli
113. What is the other name given to the Great Indian Desert?
a. Sahara
b. Thar
c. Kalahari
d. Atacama
114. Which of these festivals is celebrated in Rajasthan?
a. Gangaur
b. Pongal
c. Onam
d. Lohri
115. This river divides the southern Plateau into 2 parts.
a. Kaveri
b. Krishna
c. Godavari
d. Narmada
116. It is the longest river in the Deccan Plateau.
a. Godavari
b. Narmada
c. Krishna
d. Kaveri
117. This state is famous for Kolar Gold Mines.
a. Andhra Pradesh
b. Karnataka
c. Tamil Nadu
d. Orissa
118. Which of these states remain dry even during the monsoon?
a. Kerala
b. Meghalaya
c. Karnataka
d. Tamil Nadu
119. These worms are called friends of farmers.
a. Earthworms
b. Bristle worms
c. Leeches
d. Ladybug
120. What do tanker ships carry?
a. Coal
b. Oil
c. Rice
d. Marble
121. Which of these is not a means of communication?
a. Train
b. Radio
c. Television
d. Newspaper
122. Which of these is used to rescue people during the natural disaster?
a. Aeroplane
b. Train
c. Bus
d. Helicopter
123. Which of these animals lives in the Thar-Desert?
a. Yak
b. Tiger
c. Leopard
d. Chinkara
124. Jute grows in _____ soil.
a. Alluvial

- b. Desert
c. Mountain
d. Laterite
125. Which of these is a place of tourist in Himachal Pradesh?
a. Manali
b. Srinagar
c. Nainital
d. Itanagar
126. _____ can be sent through internet.
a. Parcel
b. Speed post
c. Letter
d. Email
127. Which of these is a Cash Crop?
a. Rice
b. Coffee
c. Wheat
d. Millets
128. Which part of India is a peninsula?
a. Northern
b. Southern
c. Eastern
d. Western
129. The Malwa Plateau lies in the _____.
a. Central highlands
b. Himalayas
c. Northern Plains
d. Thar Desert
130. Marmagao is famous for _____.
a. Electronic Goods
b. Ship Building
c. Jute Mill
d. Automobiles
131. Which of these is not a weather condition?
a. Sunny
b. Windy
c. Cloudy
d. Winter
132. The people of Assam celebrate this festival.
a. Lohri
b. Ram Yatra
c. Bihu
d. Chhat
133. Which of these is not a means of irrigation?
a. River
b. Tube well
c. Canal
d. Sprinkler
134. Which of these languages is written from left to right?
a. Tamil
b. Hindi
c. Kashmiri
d. Bangla
135. _____ is a natural resource?
a. Building
b. Forest
c. Electricity
d. Machine
136. The mountain forest are also called _____ forest.
a. Tidal
b. Tropical
c. Monsoon
d. Coniferous
137. Whom did Akbar defeat at the 2nd battle of panipat?
a. Hemu
b. Chand Bibi
c. Rani Durgawati
d. Maharana Pratap
138. Steel is made from _____.
a. Coal
b. Limestone
c. Manganese
d. Copper
139. This is an embroidery technique from Punjab. It means flower working.
a. Chicken
b. Batik
c. Gota-Patti
d. Phulkari
140. In which year India became a Republic?
a. 1947
b. 1950

- c. 1975
d. 2015
141. Which state has taken Sanskrit as their official language?
a. Madhya Pradesh
b. Jharkhand
c. Uttarakhand
d. Rajasthan
141. She's the first female Indian astronaut.
a. Sunita Whilliams
b. Kalpana Chawla
c. Bachendri Pal
d. Deepa Malik
142. What is the study of universe known as ?
a. Cosmology
b. Meteorology
c. Astrology
d. Seismology
143. It is the full form of EVM .
a. Electronic Voting Machine
b. Easy Voting Machine
c. Extra Voting Machine
d. Efficient Voting Machine
144. Which parts of the body keeps on growing throughout our life ?
a. Arms and Fingers
b. Calf and Toes
c. Tongue and Teeth
d. Nose and Ears
145. Which famous explorer discovered Cuba?
a. Marko Polo
b. Christopher Columbus
c. Vasco Da Gama
d. Francisco Pizarro
146. Which instrument is used to measure the wind speed ?
a. Wind gauge
b. Tachometer
c. Anemometer
d. Decibel Meter
147. Where is the World Health Organisation located?
a. Geneva
b. Tokyo
c. Beijing
d. New York
148. What is the top color in a rainbow?
a. Violet
b. Green
c. Yellow
d. Red
149. Who was the first Nobel Prize winner in India?
a. C.V Raman
b. Rabindranath Tagore
c. Amartya Sen.
d. Kailash Satyarthi
150. Where is international court of justice located ?
a. Geneva
b. London
c. New York
d. Hague
151. This book is written by Pt. Jawaharlal Nehru
a. Wings of Fire
b. Discovery of India
c. My Experiment with Truth
d. Geetanjali
152. What is the weather for a long period of time known as?
a. Seasons
b. Atmosphere
c. Climate
d. Weather
153. Which is the most important form of precipitation?
a. Snow
b. Cloud
c. Rainfall
d. Thunder
154. In which year was the Ozone hole first discovered?
a. 1985
b. 1987
c. 1982
d. 1980
155. Which city was considered the most polluted in India (2018)?
a. Jaipur
b. Surat
c. Gurugram
d. Nagpur

156. Which of these is known as White Gold?

- a. Rubber
- b. Cotton
- c. Mushroom
- d. Jute

157. Which Mineral is good for your Bones?

- a. Calcium
- b. Iodine
- c. Iron
- d. Vitamin

158. What should you do before you leap?

- a. Look
- b. Sing
- c. Jump
- d. Dance

159. Which is the National game of Brazil?

- a. Table Tennis
- b. Football
- c. Tennis
- d. Billiards

160. What is the name of stream at the source of river?

- a. Head Water
- b. Waterfall

सही विकल्प पर (✓) लगाओ

166. हमारे देश की राष्ट्रभाषा है—

- क पंजाबी
- ख उर्दू
- ग अंग्रेज़ी
- घ हिंदी

167. प्रतिवर्ष हिन्दी दिवस मनाया जाता है—

- क 26 जनवरी
- ख 14 सितंबर
- ग 25 दिसंबर
- घ कोई नहीं

168. हिन्दी में व्यंजन वर्णों की संख्या कितनी है?

- क 22
- ख 10
- ग 33
- घ 30

169. कवि का स्त्रीलिंग रूप क्या है?

- क कवियत्री
- ख कवियाणी
- ग कवयित्री
- घ इनमें से कोई नहीं

c. Lake

d. Backwater

161. How high up in the atmosphere is the Ozone layer?

- a. 11km
- b. 22km
- c. 33km
- d. 44km

162. Where did Vasco-Da-Gama land in India?

- a. Calicut
- b. Kochi
- c. Chennai
- d. Delhi

163. Who has been appointed as the acting chairman of the union public service commission (UPSC)?

- a. Arvind Saxena
- b. Sudha Jain
- c. Kirti Kumar
- d. Omi Agrawal

164. India's first ever national police museum will establish in which city?

- a. Chennai
- b. Delhi
- c. Nagpur
- d. Kolkata

170. 'आकाश' शब्द का विलोम है—

- क धरती
- ख पाताल
- ग जल
- घ नभ

171. 'अपमान' शब्द का विलोम है—

- क सम्मान
- ख बेइज्जत
- ग मान
- घ बुद्धिमान

172. ईश्वर में विश्वास करने वाला—

- क नास्तिक
- ख वास्तविक
- ग आस्तिक
- घ हस्तिक

173. जो बिना वेतन के कार्य करता है—

- क सुकर
- ख मितव्ययी
- ग अवैतनिक
- ध कुलीन

174. 'सत्याग्रह' शब्द के लिए उपयुक्त वाक्यांश है—

- क गृह के लिए पूजा
- ख सत्य के लिए उपवास
- ग ग्रहण के दिन उपवास
- ध सत्य के लिए आग्रह

175. 'गुरु' का जो सही अर्थ नहीं है, उस पर (

×) का निशान लगाइए—

- क शिक्षक
- ख श्रेष्ठ
- ग बलवान
- ध बड़ा

176. जो शब्द किसी विशेष व्यक्ति, वस्तु या स्थान का बोध कराए, उसे कहते हैं—

- क जातिवाचक संज्ञा
- ख व्यक्तिवाचक संज्ञा
- ग भाव वाचक संज्ञा
- ध समुदायवाचक संज्ञा

177. जो शब्द किसी जाति का बोध कराए, उसे कहते हैं—

- क जातिवाचक संज्ञा
- ख व्यक्तिवाचक संज्ञा
- ग भाववाचक संज्ञा
- ध समूहवाचक संज्ञा

178. स्त्रीलिंग—पुल्लिंग का कौन सा जोड़ा सही है—

- क हिरण—हरणी
- ख पुत्र—पुत्री
- ग नाना—निमा
- ध बेटा—बंटी

179. हिन्दी में कितने वचन होते हैं?

- क तीन
- ख चार
- ग दो
- ध एक

180. इनमें से सर्वनाम शब्द कौन सा है—

- क सीता
- ख चित्रा
- ग मैं
- ध आदमी

181. सही वाक्य का चयन करें—

- क मैंने एक मोटे, काला साँप को देखा
- ख मैंने एक मोटे, काले साँप को देखा
- ग मैं एक मोटा, काला साँप को देखा
- ध मैंने मोटा, कोले साँप को देखा

182. सही वाक्य का चयन करें—

- क मैंने आपसे कहा था
- ख मैंने कहा था आपने
- ग आपसे कहा था मैंने
- ध आपसे मैंने कहा था।

183. 'जीवन' शब्द का विलोम है—

- क मरण
- ख निधन
- ग मौत
- ध देहावसान

184. रेखांकित शब्द का सही विलोम छाँटिए—

माता का हृदय कोमल होता है,---- नहीं।

- क सख्त
- ख निर्मम
- ग कड़ा
- ध कठोर

185. सही विकल्प का चयन करें—

जो साथ पढ़ता हो—

- क सहायक
- ख उपरोक्त सभी
- ग सहपाठी
- ध साथी

186. सही विकल्प का चयन करें—

नीचे लिखा हुआ—

- क अग्रलिखित
- ख निम्नलिखित
- ग नीचे
- ध आगे

187. सही विकल्प का चयन करें—

प्रतिदिन होने वाला—

- क मासिक
- ख वार्षिक
- ग दैनिक
- ध प्रत्येक दिन

188. लिंग बदलो— सही विकल्प का चयन करें—

हाथी—

- क हाथिनी
- ख हथिनी
- ग हाथिन
- ध मादा हाथी

189. लिंग बदलो— सही विकल्प का चयन करें—

बूढ़ा—

- क बूढ़ी
- ख बुढ़ापा
- ग बूढ़िया
- ध बुढ़िया

190. लिंग बदलो— सही विकल्प का चयन करें—
नौकर—

- क नौकराइन
- ख नौकरानी
- ग नौकराईन
- ध नौकरी

191. घर का पर्यायवाची शब्द नहीं है?

- क पावक
- ख सदन
- ग शाला
- ध निकेतन

192. 'माँ' शब्द का पर्यायवाची है—

- क माता
- ख नारी
- ग अंबु
- ध स्त्री

193. पहाड़ शब्द का पर्यायवाची है—

- क पंकज
- ख धरा
- ग गिरि
- ध वत्स

194. 'प्रपंच' शब्द में उपसर्ग है—

- क प्र
- ख पंच
- ग च
- ध प्रय

195. 'अनपढ़' शब्द में उपसर्ग है—

- क प
- ख अन
- ग पढ़
- ध कोई नहीं

196. 'टाँग अड़ाना' मुहावरे का अर्थ है—

- क लंगड़ा कर चलना
- ख गिरा देना
- ग दखल न देना
- ध व्यर्थ में हस्तक्षेप करना

197. घी के लिए जलाना—

- क खुशी मनाना
- ख मोमबत्ती जलाना
- ग मुस्कराना
- ध कोई भी नहीं

198. दाल में कुछ काला होना—

- क पत्थर आना
- ख संदेह होना
- ग खुशामद करना
- ध दुखी होना

199. किसने कहा था—“तुम मुझे खून दो, मैं तुम्हें
आज़ादी दूँगा।”?

- क कबीर दास
- ख सूरदास
- ग सुभाष चन्द्र बोस
- ध नाना पाटेकर

200. जवाहर लाल नेहरू का जन्मदिन होता है।

- क 12 नवम्बर
- ख 20 नवम्बर
- ग 14 नवम्बर
- ध 25 नवम्बर

1.c	2.a	3.b	4.a	5.a	6.b	7.c	8.c	9.d	10.d
11.c	12.a	13.a	14.a	15.b	16.b	17.a	18.b	19.b	20.b

21.c	22.b	23.c	24.a	25.d	26.a	27.a	28.a	29.b	30.a
31.c	32.d	33.c	34.c	35.c	36.d	37.a	38.a	39.c	40.c
41.b	42.d	43.a	44.c	45.c	46.d	47.d	48.a	49.c	50.d
51.c	52.c	53.a	54.c	55.b	56.d	57.a	58.c	59.c	60.b
61.b	62.c	63.c	64.a	65.c	66.a	67.d	68.d	69.b	70.d
71.c	72.b	73.b	74.b	75.a	76.b	77.c	78.c	79.b	80.b
81.d	82.b	83.a	84.c	85.a	86.b	87.a	88.c	89.a	90.b
91.b	92.a	93.c	94.d	95.c	96.c	97.d	98.a	99.b	100.b
101.b	102.a	103.c	104.b	105.a	106.a	107.b	108.c	109.a	110.d
111.d	112.a	113.b	114.a	115.d	116.a	117.b	118.d	119.a	120.b
121.a	122.d	123.d	124.a	125.a	126.d	127.b	128.b	129.a	130.b
131.d	132.c	133.a	134.c	135.b	136.d	137.a	138.c	139.d	140.b
141.c	142.b	143.a	144.a	145.d	146.b	147.c	148.a	149.d	150.b
151.d	152.b	153.c	154.c	155.a	156.b	157.b	158.a	159.a	160.b
161.a	162.c	163.a	164.a	165.b	166. ध	167. ख	168. ग	169. ग	170. ख
171. ग	172. ग	173. ग	174. ध	175. ग	176. ख	177. क	178. ख	179. ग	180. ग
181. ख	182. ध	183. क	184. ध	185. ग	186. ख	187. ग	188. ख	189. ध	190. ख
191. क	192. क	193. ग	194. क	195. ख	196. ध	197. क	198. ख	199. ग	200. ग